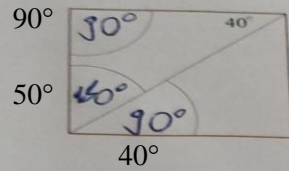
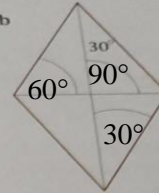


3. Wpisz na rysunkach miary zaznaczonych kątów.


Prostokąt



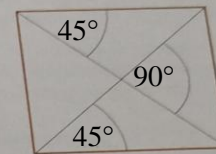
Romb




Równoległobok



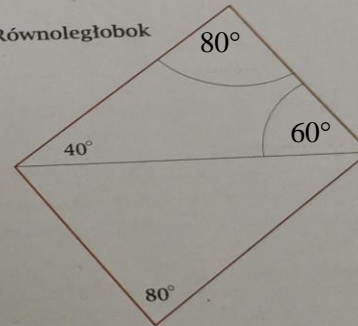
Kwadrat



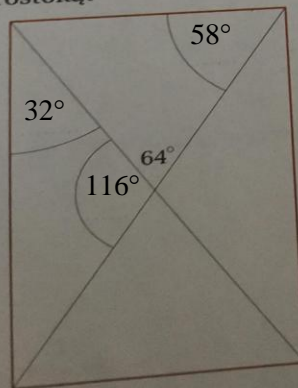
Trapez równoramienny



Równoległobok



Prostokąt



Trapez

